



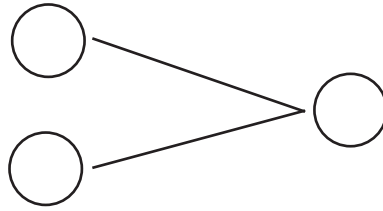
NAME _____

DATE _____

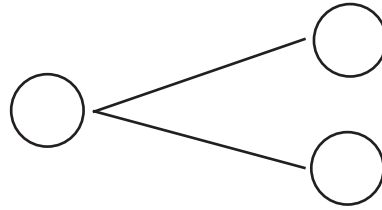
ADDITIONS

Complete the addition sentences and fill the number bond.

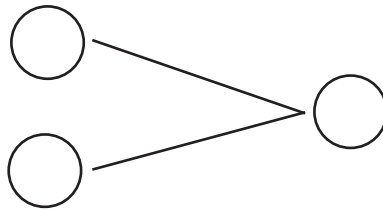
1) $3 + 9 = \underline{\quad}$



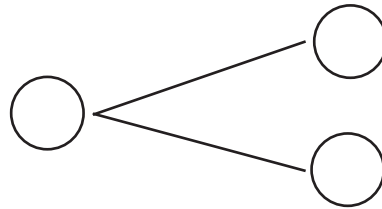
2) $9 + 7 = \underline{\quad}$



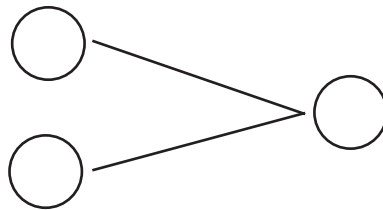
3) $6 + 10 = \underline{\quad}$



4) $8 + 9 = \underline{\quad}$



5) $10 + 3 = \underline{\quad}$



6) $3 + 10 = \underline{\quad}$

