



NAME _____

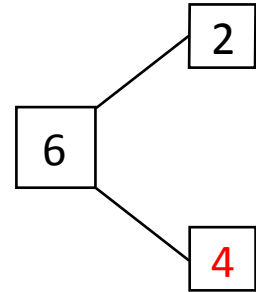
DATE _____

NUMBER BOND

Fill in the number bond for given number sentences.

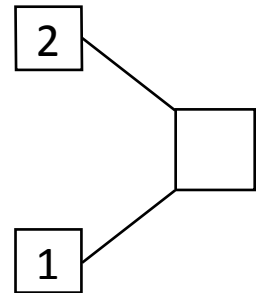
Example:

$$\boxed{2} + \boxed{4} = \boxed{6}$$



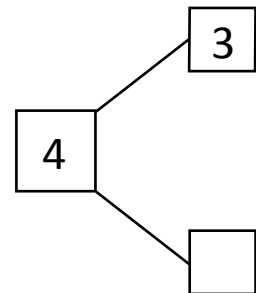
1)

$$\boxed{} + \boxed{1} = \boxed{3}$$



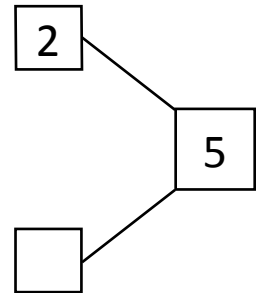
2)

$$\boxed{3} + \boxed{} = \boxed{4}$$



3)

$$\boxed{} + \boxed{3} = \boxed{5}$$



4)

$$\boxed{} + \boxed{1} = \boxed{2}$$

