



NAME \_\_\_\_\_

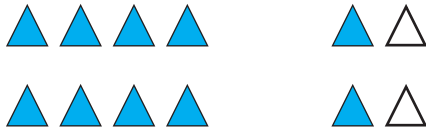
DATE \_\_\_\_\_

# ADDITIONS

Change the picture to make a ten. Write the easier number sentence and solve.

Example:

$$8 + 4$$



$$10 + \underline{2} = \underline{12}$$

1.  $6 + 7$



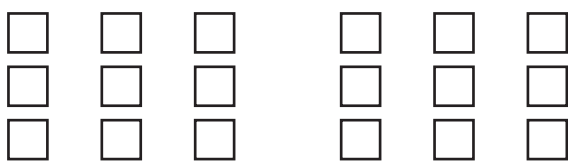
$$10 + \underline{\quad} = \underline{\quad}$$

3.  $5 + 8$



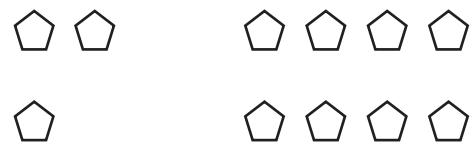
$$10 + \underline{\quad} = \underline{\quad}$$

2.  $9 + 9$



$$10 + \underline{\quad} = \underline{\quad}$$

4.  $3 + 8$



$$10 + \underline{\quad} = \underline{\quad}$$