




NAME _____

DATE _____

NUMBER BOND

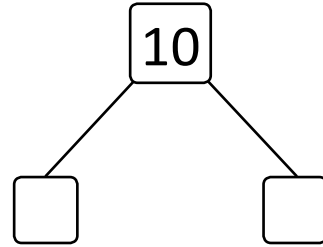
Complete the number bond and number sentences to match the picture.

1)




$$\boxed{7} + \boxed{} = \boxed{10}$$

$$\boxed{} + \boxed{7} = \boxed{10}$$

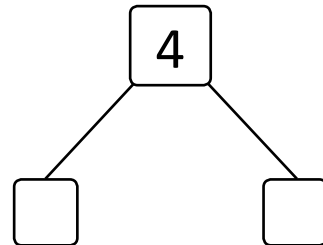


2)



$$\boxed{1} + \boxed{} = \boxed{4}$$

$$\boxed{} + \boxed{1} = \boxed{4}$$



3)



$$\boxed{} + \boxed{2} = \boxed{6}$$

$$\boxed{2} + \boxed{} = \boxed{6}$$

