



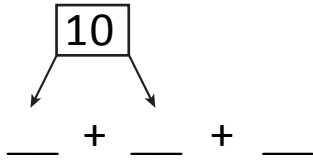
NAME _____

DATE _____

ADDING THREE NUMBERS

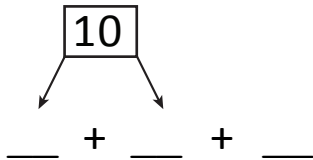
Circle the numbers that make ten. Draw a picture and complete the number sentences.

1) $3 + 7 + 5 = \square$



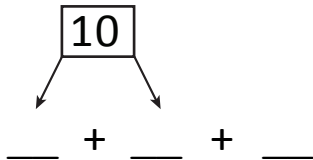
$\boxed{10} + _ = _$

2) $8 + 2 + 3 = \square$



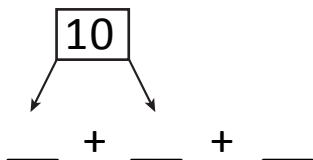
$\boxed{10} + _ = _$

3) $1 + 9 + 2 = \square$



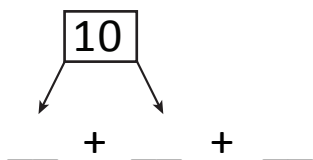
$\boxed{10} + _ = _$

4) $8 + 2 + 6 = \square$



$\boxed{10} + _ = _$

5) $7 + 5 + 5 = \square$



$\boxed{10} + _ = _$