



NAME \_\_\_\_\_

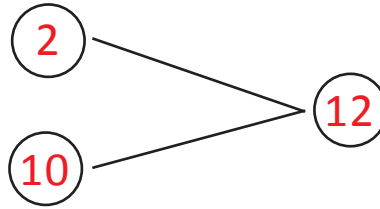
DATE \_\_\_\_\_

## ADDITIONS

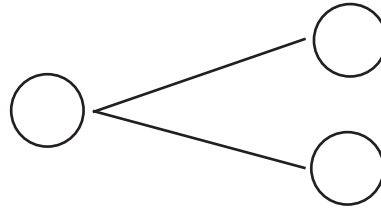
Complete the addition sentences and fill the number bond.

Example:

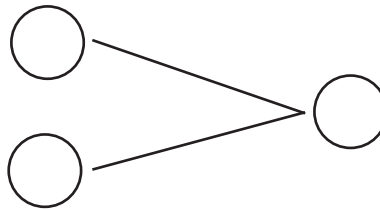
$$10 + 2 = \underline{12}$$



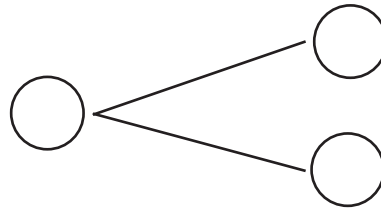
1)  $7 + 10 = \underline{\quad}$



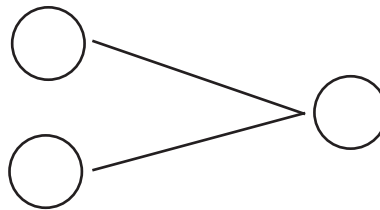
2)  $5 + 10 = \underline{\quad}$



3)  $10 + 8 = \underline{\quad}$



4)  $10 + 4 = \underline{\quad}$



5)  $9 + 9 = \underline{\quad}$

