



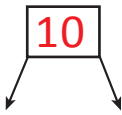
NAME _____

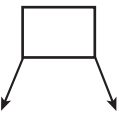
DATE _____

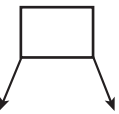
ADDING THREE NUMBERS

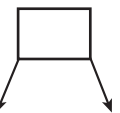
Circle the numbers that make ten. Put them into a number bond and solve.

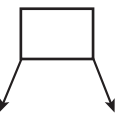
Example:



 $\textcircled{8} + \textcircled{2} + 4 = \underline{14}$

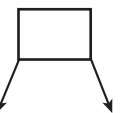
1) 
 $1 + 6 + 4 = \underline{\quad}$

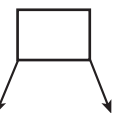
6) 
 $3 + 5 + 5 = \underline{\quad}$

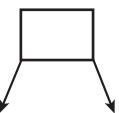
2) 
 $7 + 3 + 3 = \underline{\quad}$

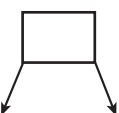
7) 
 $1 + 2 + 8 = \underline{\quad}$

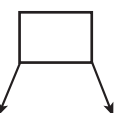
3) 
 $4 + 6 + 5 = \underline{\quad}$

8) 
 $5 + 5 + 8 = \underline{\quad}$

4) 
 $1 + 9 + 2 = \underline{\quad}$

9) 
 $7 + 5 + 5 = \underline{\quad}$

5) 
 $5 + 3 + 7 = \underline{\quad}$

10) 
 $6 + 4 + 5 = \underline{\quad}$