



NAME _____


DATE _____

ADDITION WORD PROBLEMS

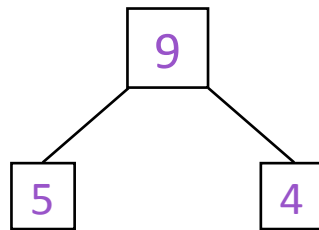
Addition word problems using number bonds.

Example:

Adam has 5 chocolates. Allan has 4 more chocolates than Adam. How many chocolates does Allan have?




b) Draw a complete number bond that goes with this story.



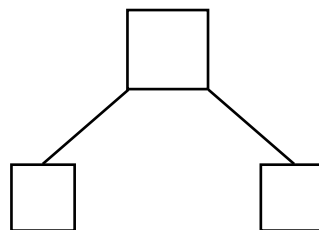
c) Write an addition sentence that match this story.

$$\underline{5} + \underline{4} = \underline{9}$$

1) There were 3 boys in the class room. After the bell rang, 3 more boys came into class room. Now there are 6 boys in the class.



b) Draw a complete number bond that goes with this story.



c) Write an addition sentence that match this story.

$$\underline{\quad} + \underline{\quad} = \underline{\quad}$$