




NAME _____

DATE _____

NUMBER BOND

Addition word problems using number bonds.

1) Use the picture to tell a math story.

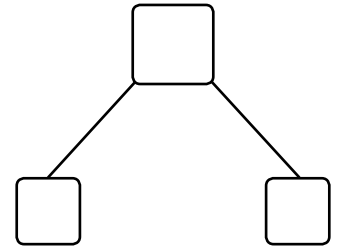


$$\square + \square = \square$$


Write a number sentence to tell the story.

Write a number bond to match your story.

There are ___ lions.



2) Use the picture to tell a math story.



$$\square + \square = \square$$

Write a number sentence to tell the story.

Write a number bond to match your story.

There are ___ butterflies.

