



NAME _____

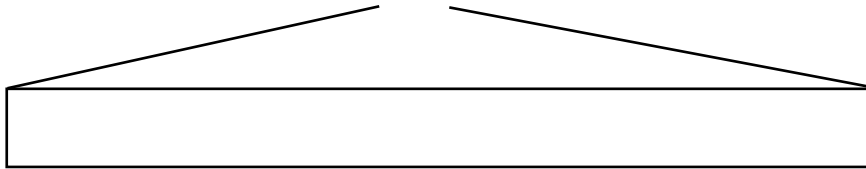
DATE _____

ADDITION WORD PROBLEMS

Read the word problem. Draw a tape diagram and label.

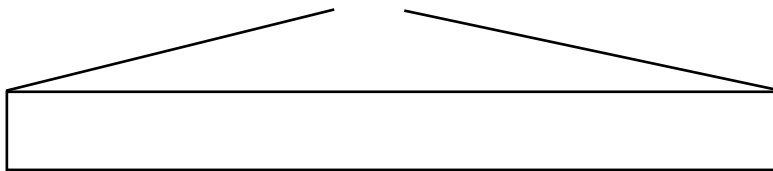
Write a number sentence and a statement that matches the story.

- 1) There are 9 boys and 9 girls are plying in a garden. How many children are playing in the garden?



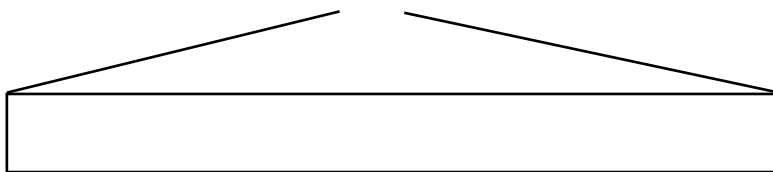
$10 + 8 = 9 + 9 = \underline{\quad}$ There are $\underline{\quad}$ children are plying in the garden.

- 2) There are 9 lorries and 6 vans are in the parking place. How many total vehicles are there?



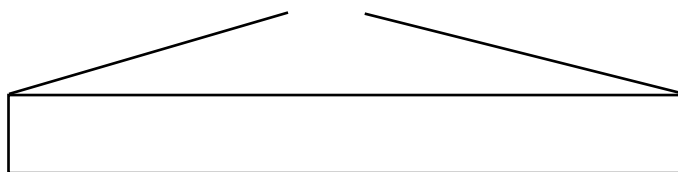
$10 + 5 = 9 + 6 = \underline{\quad}$ Number of vehicles in the parking place $\underline{\quad}$.

- 3) The fisher man caught some fishes. 8 fishes are sold and 9 fishes are in the basket. How many total fishes he caught?



$10 + 7 = 8 + 9 = \underline{\quad}$ Total fishes he caught $\underline{\quad}$.

- 4) In a meeting hall offered tea for 5 members and offered. Milk for 9 members. How many members taken tea and milk?



$4 + 10 = 5 + 9 = \underline{\quad}$ Total members taken tea and milk $\underline{\quad}$.