



NAME _____

DATE _____

ADDITION SENTENCES

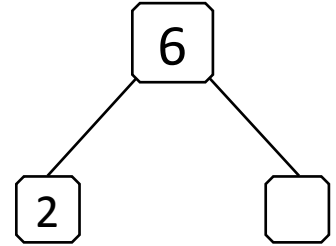
Questions based on thinking and understanding.

- 1) Sharat have got 6 pens. He gave two of them to his friends. How many pens he have now?



$$\boxed{6} = \boxed{2} + \boxed{?}$$

$$\boxed{6} = \boxed{2} + \boxed{}$$



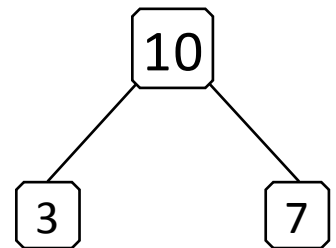
Sharat have now ___ pens.

- 2) Reshma has 10 dollars. She spent 3 dollars for her note books. How much money she has now?




$$\boxed{10} = \boxed{3} + \boxed{?}$$

$$\boxed{10} = \boxed{3} + \boxed{}$$



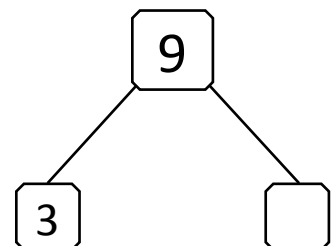
She has now ___ dollars.

- 3) There are 9 pencils in a pocket. 3 pen already used by Sharma. How many pencils are now in the pocket?



$$\boxed{9} = \boxed{3} + \boxed{?}$$

$$\boxed{9} = \boxed{3} + \boxed{}$$



Remaining pencils in the pocket ___.