




NAME _____

DATE _____

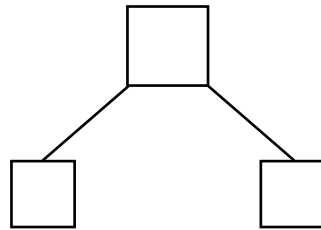
ADDITION WORD PROBLEMS

Addition word problems using number bonds.

- 1) There are 4 milk bottles and newly 7 milk bottles are added. How many total bottles are there ?




- b) Draw a complete number bond that goes with this story.



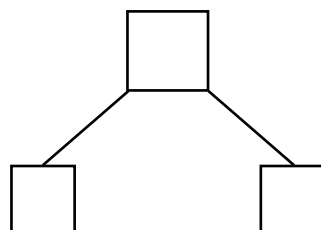
- c) Write an addition sentence that match this story.

$$\underline{\quad} + \underline{\quad} = \underline{\quad}$$

- 2) Ramya got 7 biscuits in the school. Ranjani got 9 biscuits in the same school. How many biscuits have they in total?



- b) Draw a complete number bond that goes with this story.



- c) Write an addition sentence that match this story.

$$\underline{\quad} + \underline{\quad} = \underline{\quad}$$