



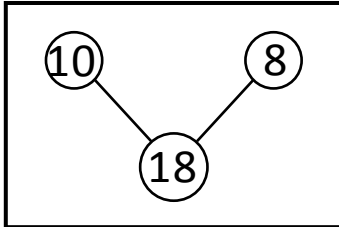
NAME _____

DATE _____


ADDITION WORD PROBLEMS

Verify the work done by 3 friends stated as under. One of the works is wrong make it in correct procedure.


1. There are 10 butterflies sitting on flowers and 8 butterflies flying. How many butterflies are there?



$$10 + 8 = 18$$

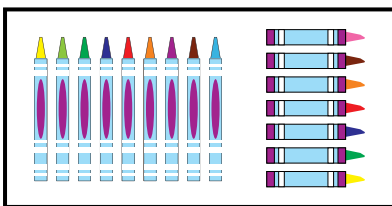


$$10 + 8 = 18$$

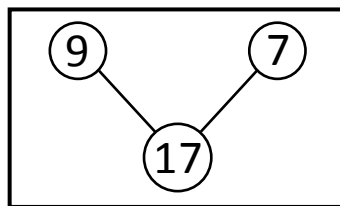


$$9 + 9 = 18$$

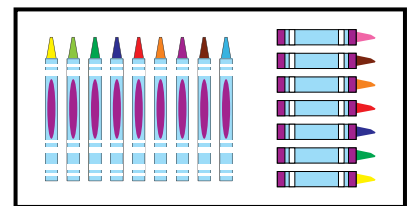
-
2. Toby has 9 new crayons and 7 old crayons. How many crayons Toby have?



$$9 + 7 = 16$$



$$9 + 7 = 17$$



$$9 + 7 = 16$$