

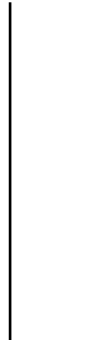
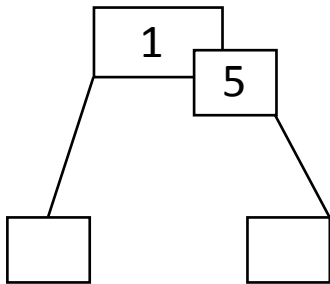


NAME \_\_\_\_\_ DATE \_\_\_\_\_

## COUNTING TENS AND ONES

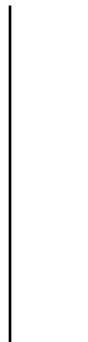
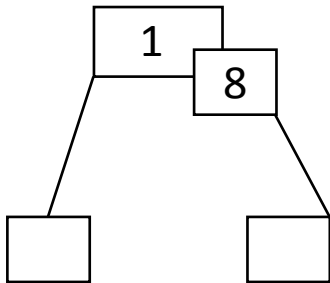
Use the hide zero pictures to draw the tens and ones shown on the cards.

1)



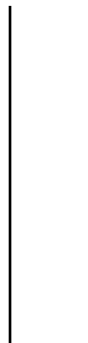
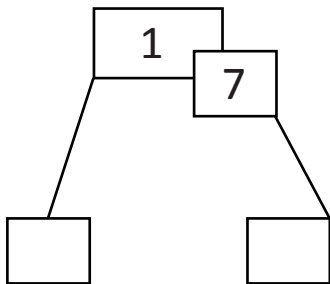
\_\_\_ ten and \_\_\_ ones.

2)



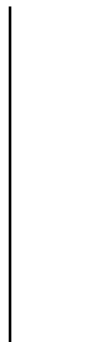
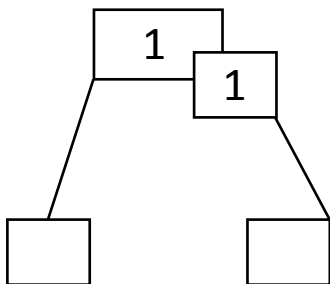
\_\_\_ ten and \_\_\_ ones.

3)



\_\_\_ ten and \_\_\_ ones.

4)



\_\_\_ ten and \_\_\_ one.