

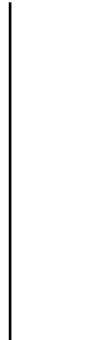
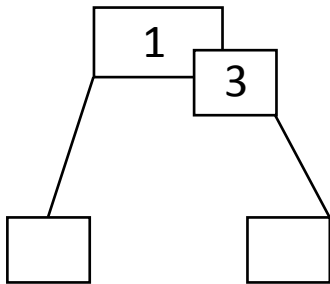


NAME _____ DATE _____

COUNTING TENS AND ONES

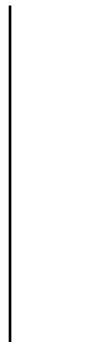
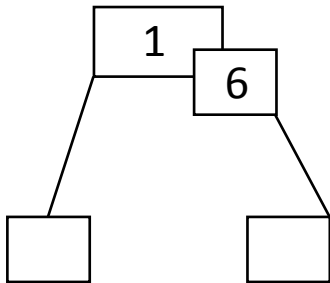
Use the hide zero pictures to draw the tens and ones shown on the cards.

1)



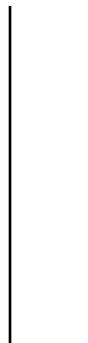
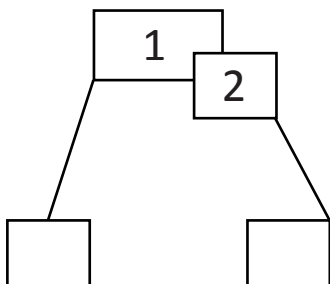
___ ten and ___ ones.

2)



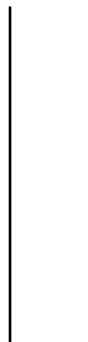
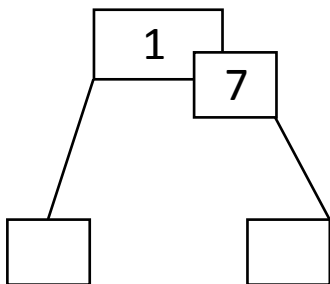
___ ten and ___ ones.

3)



___ ten and ___ ones.

4)



___ ten and ___ ones.