

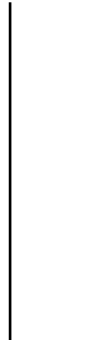
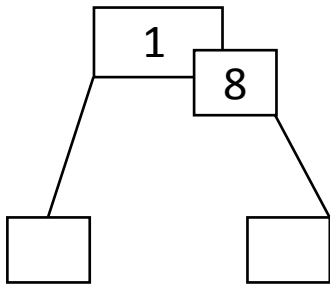


NAME _____ DATE _____

COUNTING TENS AND ONES

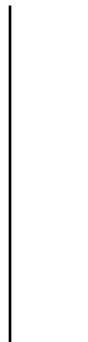
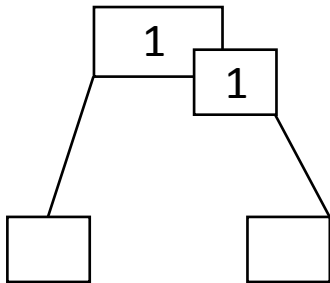
Use the hide zero pictures to draw the tens and ones shown on the cards.

1)



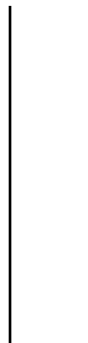
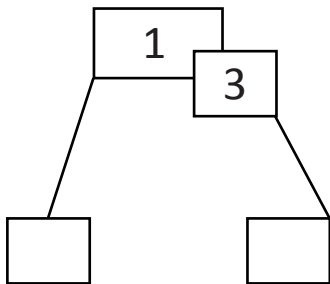
__ ten and __ ones.

2)



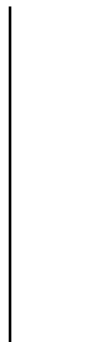
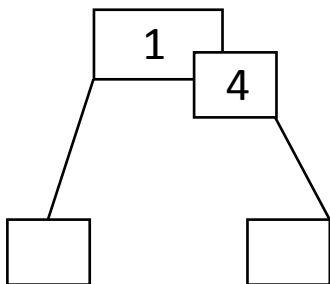
__ ten and __ one.

3)



__ ten and __ ones.

4)



__ ten and __ ones.