



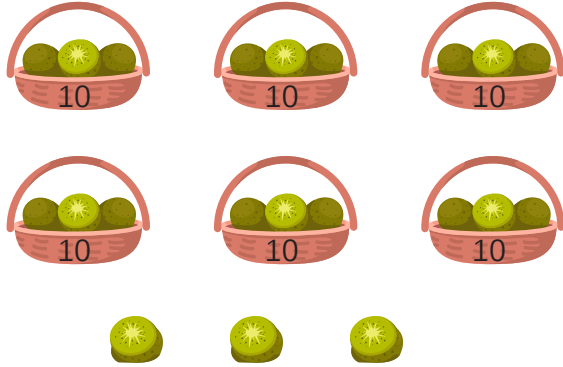
NAME \_\_\_\_\_

DATE \_\_\_\_\_

## COUNTING OBJECTS (USING PLACE VALUE CHARTS)

Count the number of objects in each group and then fill in the place value chart. Complete the number sentence using the place value charts.

1)



Tens	Ones

$$\underline{\quad} \times 10 + \underline{\quad} \times 1 = 60 + 3 = \underline{\quad}.$$


3)



Tens	Ones

$$\underline{\quad} \times 10 + \underline{\quad} \times 1 = 40 + 0 = \underline{\quad}.$$


2)



Tens	Ones

$$\underline{\quad} \times 10 + \underline{\quad} \times 1 = 80 + 5 = \underline{\quad}.$$

4)



Tens	Ones

$$\underline{\quad} \times 10 + \underline{\quad} \times 1 = 60 + 6 = \underline{\quad}.$$