

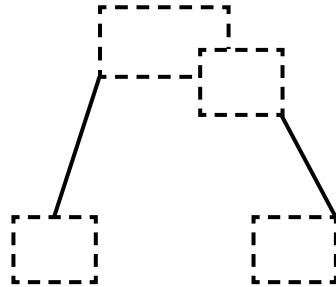
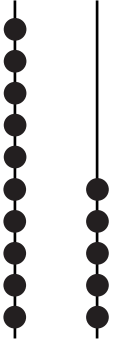


NAME _____

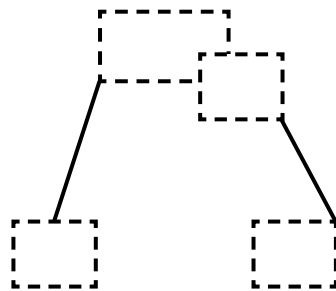
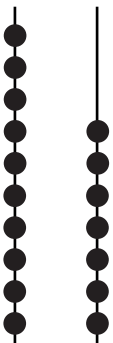
DATE _____

COUNTING TENS AND ONES

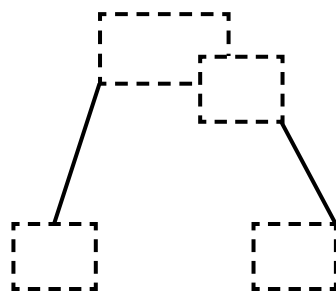
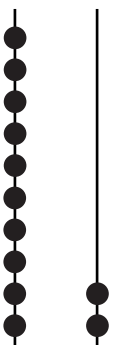
Use the hide zero cards and show total tens and ones. Write the number of tens and ones.



is the same as
__ ten and __ ones.



is the same as
__ ten and __ ones.



is the same as
__ ten and __ ones.