



NAME \_\_\_\_\_

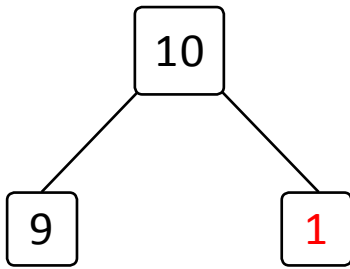
DATE \_\_\_\_\_

# SUBTRACTIONS

Write the subtraction sentences by using number bonds or using images.

Examples:

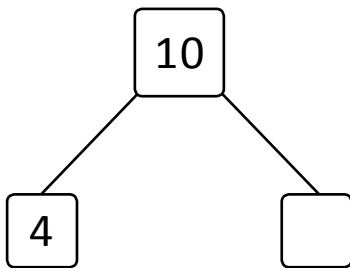
i)  $10 - 9 = \underline{1}$



ii)  $10 - 2 = \underline{8}$



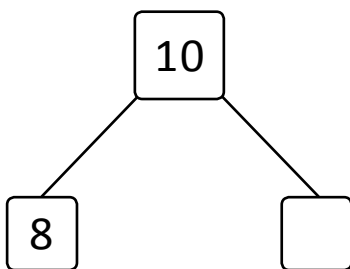
a)  $10 - 4 = \underline{\quad}$



d)  $10 - 5 = \underline{\quad}$



b)  $10 - 8 = \underline{\quad}$



e)  $10 - 7 = \underline{\quad}$



c)  $9 - 1 = \underline{\quad}$



f)  $7 - 2 = \underline{\quad}$

