



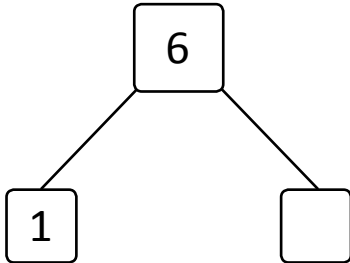
NAME \_\_\_\_\_

DATE \_\_\_\_\_

## SUBTRACTIONS

Write the subtraction sentences by using number bonds or using images.

a)  $6 - 1 = \underline{\quad}$



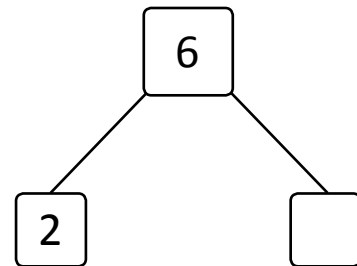
e)  $7 - 5 = \underline{\quad}$



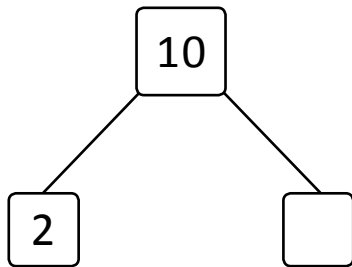
b)  $8 - 6 = \underline{\quad}$



f)  $6 - 2 = \underline{\quad}$



c)  $10 - 2 = \underline{\quad}$



g)  $10 - 9 = \underline{\quad}$



d)  $6 - 1 = \underline{\quad}$



h)  $8 - 4 = \underline{\quad}$

