

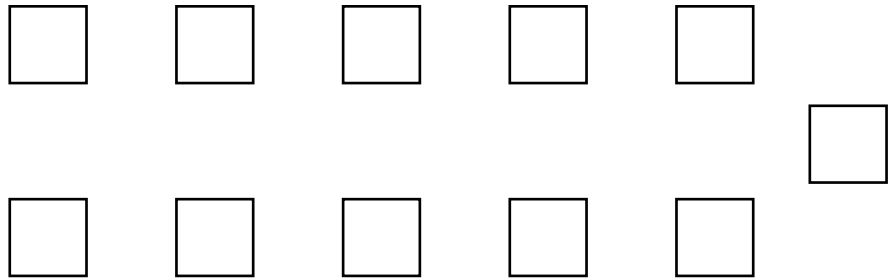


NAME \_\_\_\_\_ DATE \_\_\_\_\_

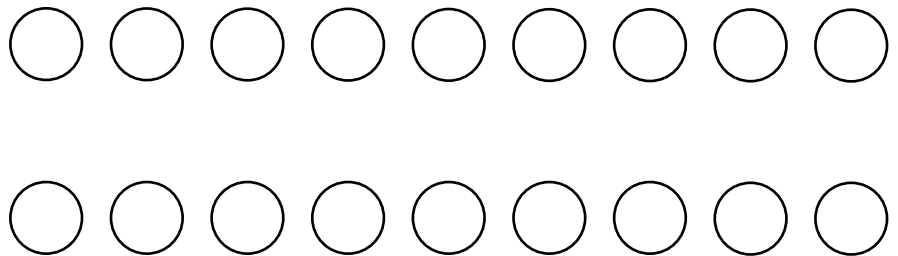
## SUBTRACTIONS

Draw and circle 10. Make a number bond and then subtract.

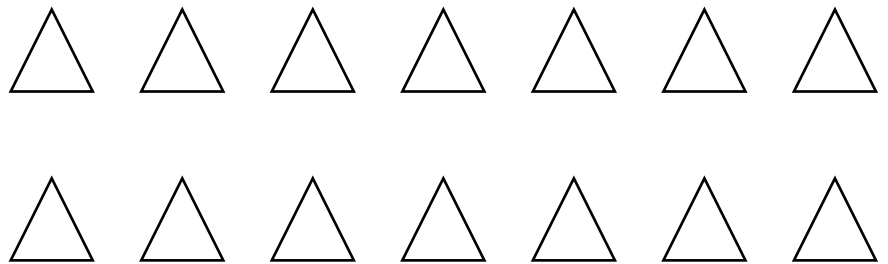
a)  $11 - 8 = \underline{\quad}$ .



b)  $18 - 8 = \underline{\quad}$ .



c)  $14 - 8 = \underline{\quad}$ .



d)  $12 - 8 = \underline{\quad}$ .

