



NAME \_\_\_\_\_

DATE \_\_\_\_\_

## SUBTRACTION WORD PROBLEMS

Solve the math stories. Complete and label the number bond and the picture number bond.

Example:

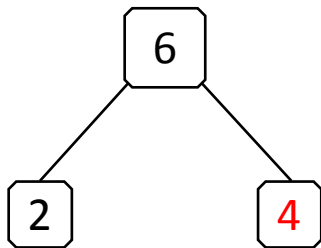
Julie has 6 candies. She ate 2 candies. How many candies are left with Julie?



Julie ate





Julie is left with



$$\boxed{2} + \boxed{4} = \boxed{6}$$

$$\boxed{6} - \boxed{2} = \boxed{4}$$

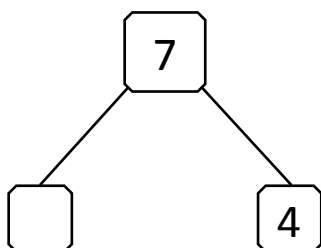
2) Andrew has 7 muffins. He gave 4 muffins to his sister. How many muffins are left with Andrew?



Andrew gave to his sister



Left with Andrew



$$\boxed{\phantom{0}} + \boxed{4} = \boxed{7}$$

$$\boxed{7} - \boxed{4} = \boxed{\phantom{0}}$$