



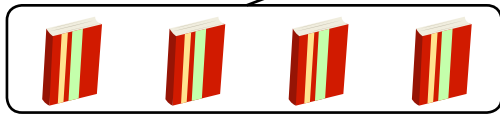
NAME _____

DATE _____

SUBTRACTION WORD PROBLEMS

Solve the math stories. Complete and label the number bond and the picture number bond.

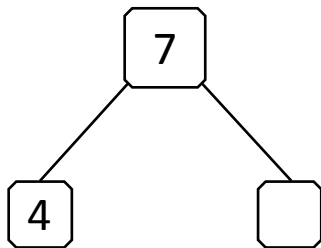
- 1) There are 7 books on the table. 4 books related to mathematics. The remaining books are environmental science. How many environmental science books are there?



Maths books




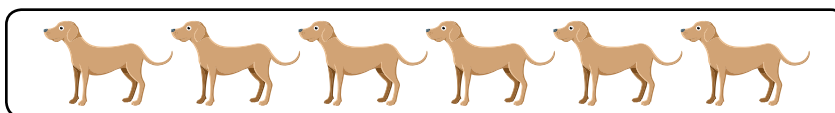
E V S books



$$4 + \square = 7$$

$$7 - 4 = 3$$

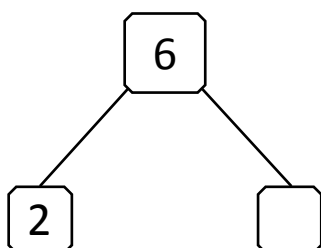
- 2) There are 6 dogs in a street only 2 dogs are barking. How many remaining dogs are kept quiet?



Dogs barking



Dogs kept quiet



$$2 + \square = 6$$

$$6 - 2 = \square$$