

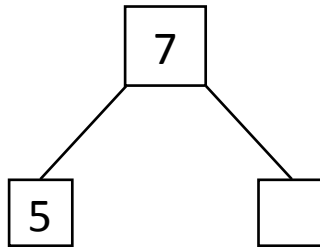


NAME _____ DATE _____

SUBTRACTION WORD PROBLEMS

Make a math drawing and circle the part you know. Cross out the unknown part. Complete the number sentences and number bond.

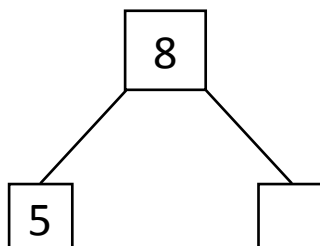

- 1) In a school there are 7 teachers. Some male teachers are working in the school. The remaining teachers 5, are females. How many male teachers are working?



$$\boxed{7} - \boxed{5} = \boxed{}$$

There are ___ male teachers are working in the school.

- 2) There are 8 buses in the bus complex. some buses are ordinary 5 buses are express services. How many ordinary buses are there?



$$\boxed{8} - \boxed{5} = \boxed{}$$

There are only ___ ordinary buses in the complex.