




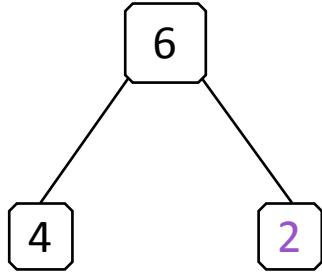
NAME _____

DATE _____

SUBTRACTION WORD PROBLEMS

Use the number bond to complete the number sentences. Use simple math drawings to tell math stories.

Example:



$$\boxed{4} + \boxed{2} = \boxed{6}$$

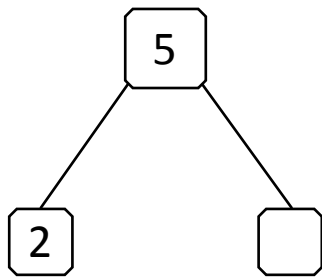
$$\boxed{6} - \boxed{4} = \boxed{2}$$

Ben has 6 apples.

He ate 4 apples.

He is left with 2 apples.

1)



$$\boxed{2} + \boxed{} = \boxed{5}$$


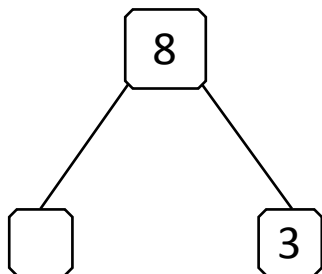
$$\boxed{5} - \boxed{2} = \boxed{}$$

Mark has party hats.

 party hats have colors on them.

 party hats have no colors on them.

2)



$$\boxed{} + \boxed{5} = \boxed{8}$$

$$\boxed{8} - \boxed{} = \boxed{5}$$

Rachel has flowers.

She gave flowers to Kiana and flowers to Maria.