




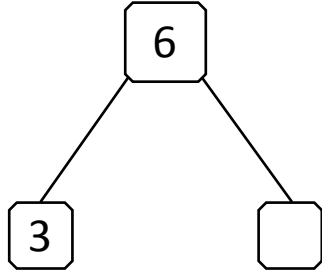
NAME _____

DATE _____

SUBTRACTION WORD PROBLEMS

Use the number bond to complete the number sentences. Use simple math drawings to tell math stories.

1)




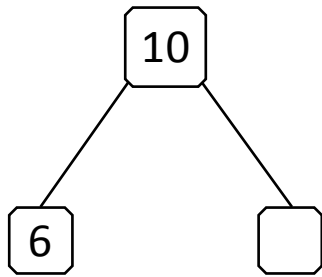
Rajani have ___ flowers.

She gave ___ flowers to Ramani and ___ flowers to Reeta.

$$\boxed{3} + \boxed{} = \boxed{6}$$

$$\boxed{6} - \boxed{} = \boxed{3}$$

2)




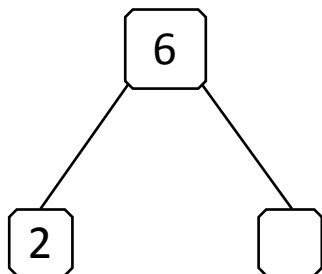
Meena have ___ pens.

She gave ___ pens to Sangeetha and ___ pens to Ali.

$$\boxed{6} + \boxed{} = \boxed{10}$$

$$\boxed{10} - \boxed{6} = \boxed{}$$

3)



There are ___ camels in the desert.

___ camels are brown. Remaining camels ___ are white.

$$\boxed{2} + \boxed{} = \boxed{6}$$

$$\boxed{6} - \boxed{2} = \boxed{}$$