



NAME _____

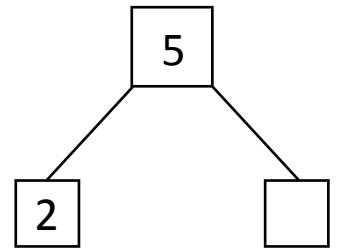

DATE _____

SUBTRACTION WORD PROBLEMS

Read the story. Cross off the items that are leaving the story.

Then complete the number bond, number sentence and number statement.

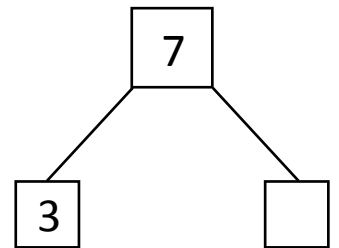
- 1) Alice is playing with 5 barbie dolls. 2 barbies have long hair and the remaining barbies have short hair. How many barbies have short hair?



$$5 - 2 = \underline{\quad}$$

__ barbies have short hair.

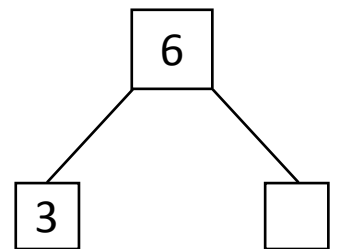
- 2) Lee caught 7 fish. Some fish are black in color. 3 fish are yellow. How many fish are black in color?



$$7 - 3 = \underline{\quad}$$

__ fish are black in color.

- 3) Ben has 6 ice creams. He ate some ice creams melted away. How many ice creams Ben ate?



$$6 - 3 = \underline{\quad}$$

Ben ate __ ice creams.