




NAME _____

DATE _____

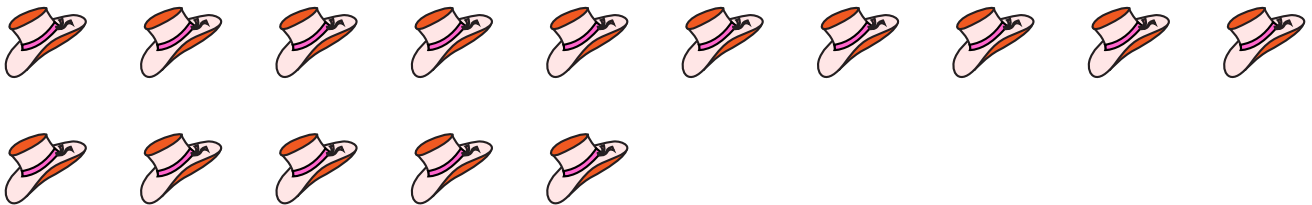
SUBTRACTIONS

Count on and write a number sentence.


- 1) Sheila made 13 cookies. She made chocochip cookies and some butter cookies. How many butter cookies Sheila made?



- 2) Milo has 15 party hats. He gave 9 party hats to friends. How many party hats are left?



- 3) Sandy collected 14 marbles. He collected 9 green marbles and some red marbles. How many red marbles Sandy collected?



- 4) Mike caught 14 fish. Some fish were died. 12 fish are alive. How many fish were died?

