



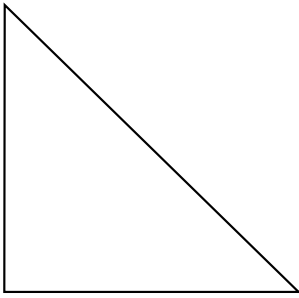
NAME \_\_\_\_\_

DATE \_\_\_\_\_

## ATTRIBUTES OF GEOMETRY SHAPES

Describe two dimensional shapes based on attributes.

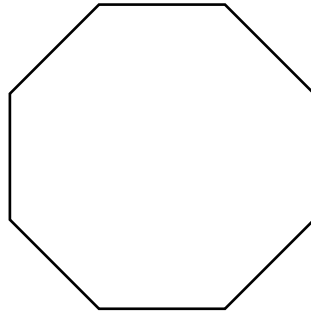
1)



\_\_\_ sides.

\_\_\_ angles.

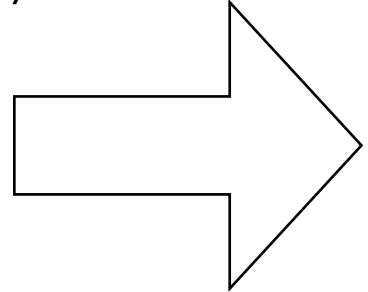
4)



\_\_\_ sides.

\_\_\_ angles.

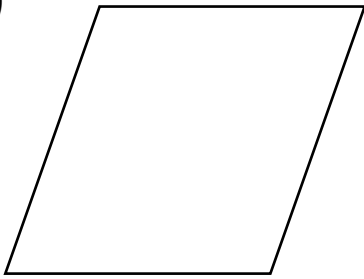
7)



\_\_\_ sides.

\_\_\_ angles.

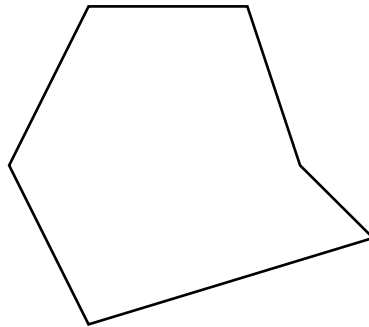
2)



\_\_\_ sides.

\_\_\_ angles.


5)



\_\_\_ sides.

\_\_\_ angles.

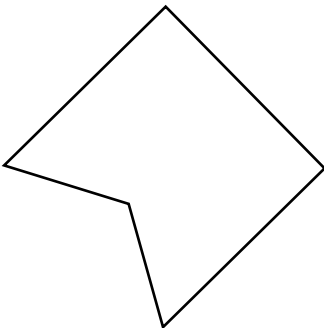
8)



\_\_\_ sides.

\_\_\_ angles.

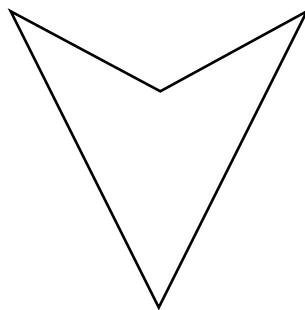
3)



\_\_\_ sides.

\_\_\_ angles.

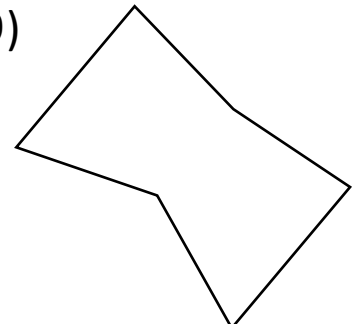
6)



\_\_\_ sides.

\_\_\_ angles.

9)



\_\_\_ sides.

\_\_\_ angles.