




NAME _____ DATE _____

PARTITIONING CIRCLES AND RECTANGLES


Partition circles and rectangles into equal parts and describe those parts as halves, thirds or fourths.

1) Partition and shade the following shapes as indicated. Each rectangle or circle is one whole.


a) 1 half




b) 1 fourth




c) 1 third



d) 2 fourths



e) 2 halves




f) 2 thirds



g) 3 thirds



h) 3 fourths



i) 3 halves

