



NAME _____ DATE _____


PARTITIONING CIRCLES AND RECTANGLES

Describe a whole by the number of equal parts including 2 halves 3 thirds and 4 fourths.


Example:

Draw to complete each shape?

- a) This is 1 half.
Draw 1 whole.



- b) This is 1 third.
Draw 1 whole.



- c) This is 1 fourth.
Draw 1 whole.



1) Draw to complete each shape?

- a) This is 1 fourth.
Draw 1 whole.



- b) This is 1 half.
Draw 1 whole.




- c) This is 1 fifth.
Draw 1 whole.




2) Draw to complete each shape?

- a) This is 1 eighth.
Draw 1 whole.



- b) This is 1 seventh.
Draw 1 whole.



- c) This is 1 sixth.
Draw 1 whole.

