

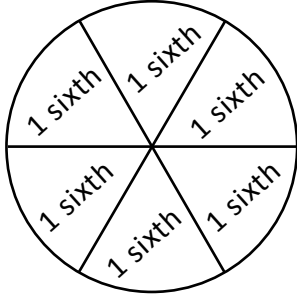


NAME \_\_\_\_\_ DATE \_\_\_\_\_

## PARTITIONING CIRCLES AND RECTANGLES

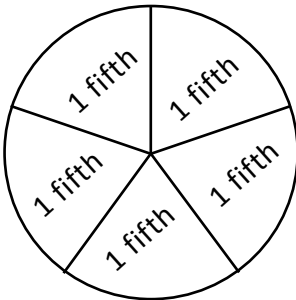
Describe a whole by the number of equal parts including 2 halves 3 thirds and 4 fourths.

1)



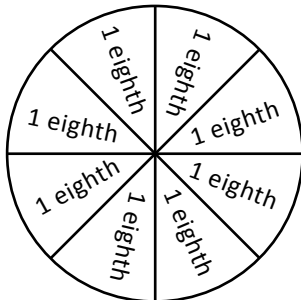
\_\_\_ sixths = \_\_\_ whole.

2)



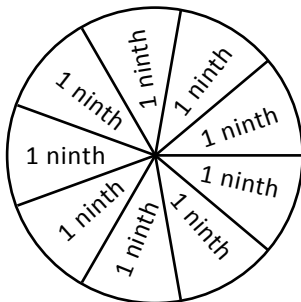
\_\_\_ fifths = \_\_\_ whole.

3)



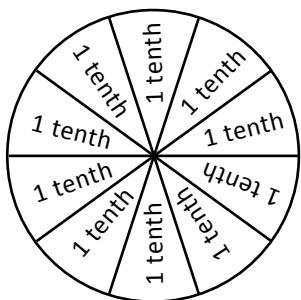
\_\_\_ eighths = \_\_\_ whole.

4)



\_\_\_ ninths = \_\_\_ whole.

5)



\_\_\_ tenths = \_\_\_ whole.