



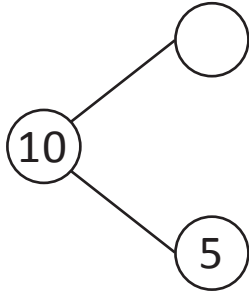
NAME _____

DATE _____

ADD OR SUBTRACT

Complete each number bond to make 10. Write at least one addition and one subtraction sentences to accompany each bond.

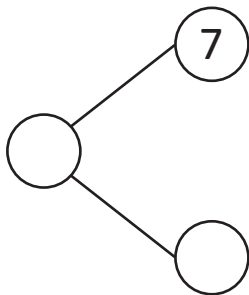
1)



$$5 + \underline{\quad} = \underline{\quad}$$

$$10 - \underline{\quad} = 5$$

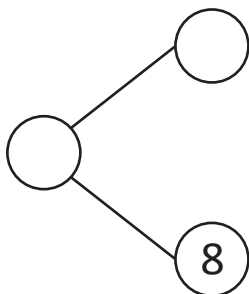
2)



$$7 + 3 = \underline{\quad}$$

$$10 - \underline{\quad} = 7$$

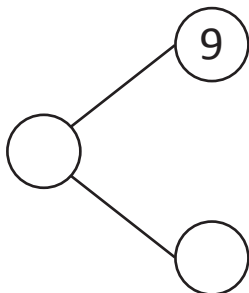
3)



$$\underline{\quad} + 2 = \underline{\quad}$$

$$10 - 8 = \underline{\quad}$$

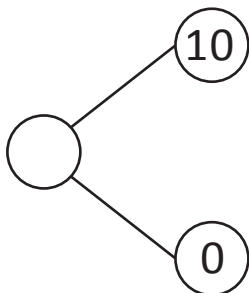
4)



$$1 + \underline{\quad} = 10$$

$$10 - \underline{\quad} = 9$$

5)



$$\underline{\quad} + 0 = \underline{\quad}$$

$$10 - \underline{\quad} = 10$$