



NAME _____

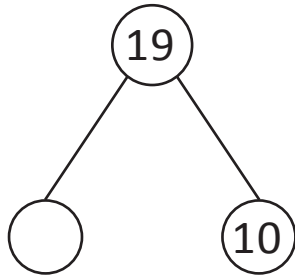
DATE _____

ADDITION/SUBTRACTION

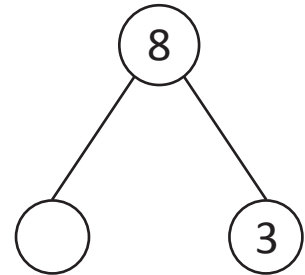
Find the unknown numbers that make the number sentences true.

(Make number bonds through ten with a subtraction focus and apply to one - step word problems).

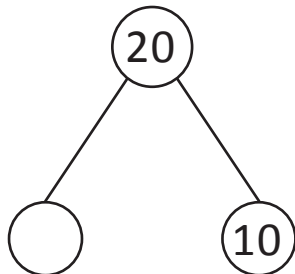
1) $19 = _ + 10$



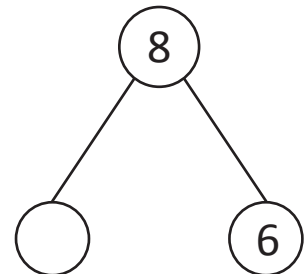
4) $8 - _ = 3$



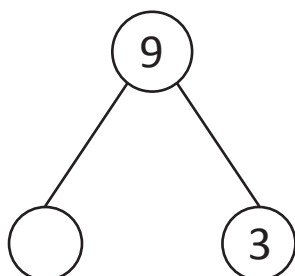
2) $20 = _ + 10$



5) $_ - 2 = 6$



3) $9 - _ = 3$



6) $15 - _ = 8$

