



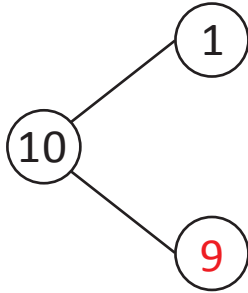
NAME _____

DATE _____

ADD OR SUBTRACT

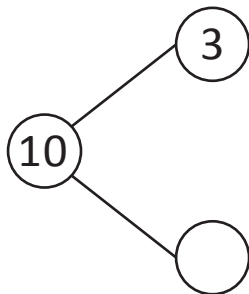
By using the number bonds add the following.

Example:



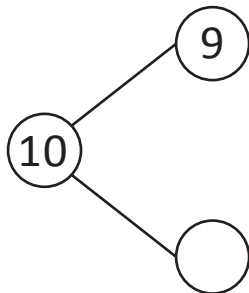
$$1 + 9 = \underline{10}$$

1)



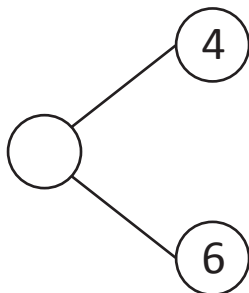
$$\underline{\quad} + 7 = 10$$

2)



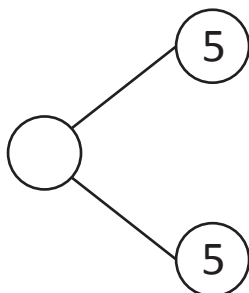
$$9 + 1 = \underline{\quad}$$

3)



$$\underline{\quad} + 6 = \underline{\quad}$$

4)



$$\underline{\quad} + 5 = \underline{\quad}$$