



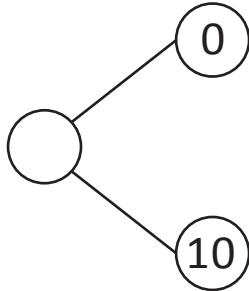
NAME _____

DATE _____

ADD OR SUBTRACT

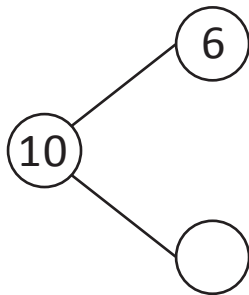
By using the number bonds add the following.

1)



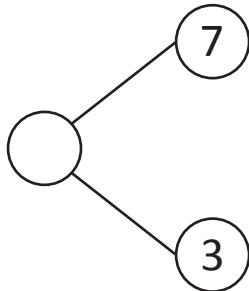
$$0 + \underline{\quad} = \underline{\quad}$$

2)



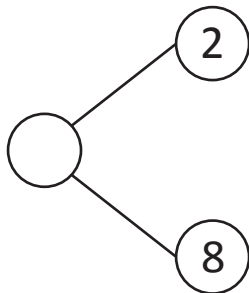
$$\underline{\quad} + 4 = 10$$

3)



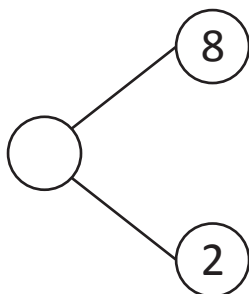
$$7 + 3 = \underline{\quad}$$

4)



$$2 + \underline{\quad} = 10$$

5)



$$8 + \underline{\quad} = 10$$