



NAME _____

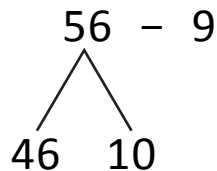
DATE _____

ADD OR SUBTRACT

Add or subtract. Within multiples of ten based on understanding place value and basic facts

1. People were still at the museum for the tour.

$$= 56 - 9$$



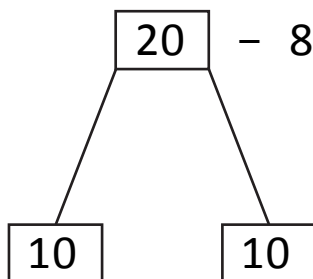
$$10 - \underline{\quad} = 1$$

$$46 + 1 = \underline{\quad}$$

$$\text{Basic fact} = 6 + 1 = 7$$

Create at least two more sets of problems if you finish early.

2. In an examination 20 pupils appeared. 8 pupils are disqualified. How many pupils are qualified.



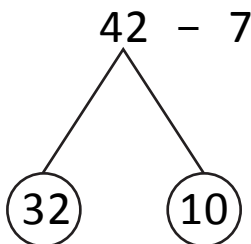
$$10 - \underline{\quad} = 2$$

$$10 + 2 = \underline{\quad}$$

12 pupils qualified.

3. There are 42 mangoes in a basket 7 mangoes were spoiled. How many mangoes are good?

$$42 - 7 = 40 + 2 - 7$$



$$10 - \underline{\quad} = 3$$

$$32 + 3 = \underline{\quad}$$

$$\text{Basic fact} = 2 + 3 = 5$$