




NAME _____

DATE _____

ADD OR SUBTRACT

Add the following.

Example:

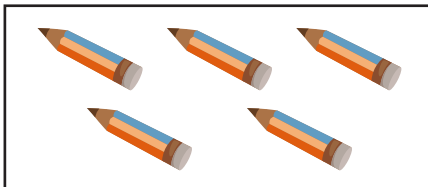


+

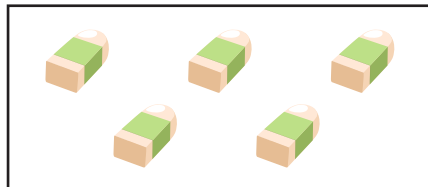


$$= \underline{4} \text{ boys} + \underline{6} \text{ girls}$$

$$= \underline{10} \text{ children}$$




+



$$= \underline{\quad} \text{ pencils} + \underline{\quad} \text{ erasers}$$

$$= \underline{\quad} \text{ objects}$$

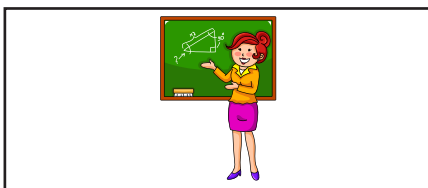


+




$$= \underline{\quad} \text{ cats} + \underline{\quad} \text{ rats}$$

$$= \underline{\quad} \text{ animals}$$




+




$$= \underline{\quad} \text{ teacher} + \underline{\quad} \text{ boys}$$

$$= \underline{\quad} \text{ persons}$$



+



$$= \underline{\quad} \text{ hen} + \underline{\quad} \text{ chick}$$

$$= \underline{\quad} \text{ birds}$$