



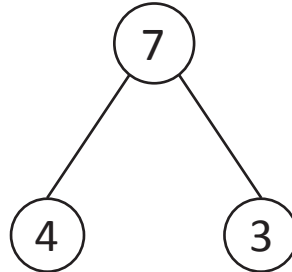
NAME _____ DATE _____

ADDITION/SUBTRACTION

Make number bonds through ten with a subtraction focus and apply to one - step word problems.

Example:

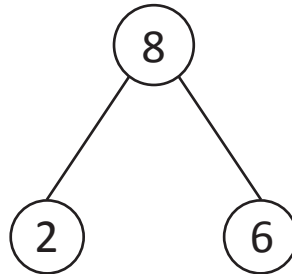
$$7 - 4 = \underline{3}$$



Do the following as given in the example.

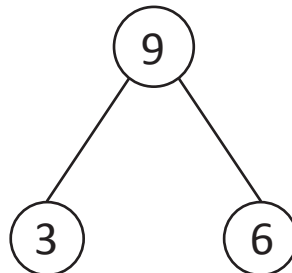
1)

$$8 - 2 = \underline{\quad}$$



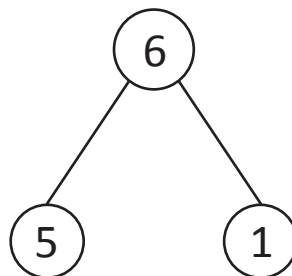
2)

$$6 = 9 - \underline{\quad}$$



3)

$$6 - 5 = \underline{\quad}$$



4)

$$9 - 2 = \underline{\quad}$$

