






NAME _____ DATE _____

ADDITION OR SUBTRACTION

Solve using place value strategies. Using the arrow way or mental math and record your answers. You may use scratch paper if you like.

1) $534 - 334 = \underline{\quad}$.

Place value strategy:

H	T	O
5	3	4
		

Arrow way:

$$534 \xrightarrow{-100} \underline{\quad} \xrightarrow{\quad} \underline{\quad} \xrightarrow{\quad} \underline{\quad} \xrightarrow{-10} \underline{\quad} \xrightarrow{\quad} \underline{\quad} \xrightarrow{\quad} \underline{\quad}$$

$$\xrightarrow{-4} \underline{\quad}$$

Mental math: (Here sum of the place values)

H	T	O		H	T	O
5	3	4	-	3	3	4

Hundreds = $\underline{\quad} - \underline{\quad} = \underline{\quad}$

Tens = $\underline{\quad} - \underline{\quad} = \underline{\quad}$

Ones = $\underline{\quad} - \underline{\quad} = \underline{\quad}$