



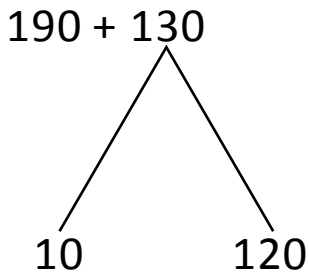
NAME _____

DATE _____

ADDITION OR SUBTRACTION

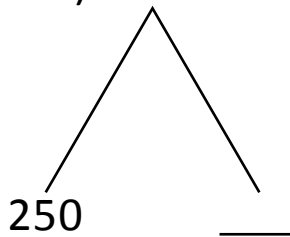
Add by drawing a number bond to make a hundred write the simplified number sentence and solve.

Example:



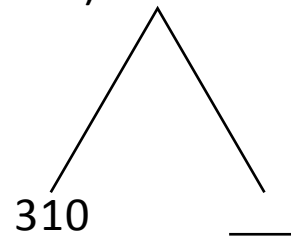
$$200 + 120 = \underline{320}.$$

1) $260 + 190$



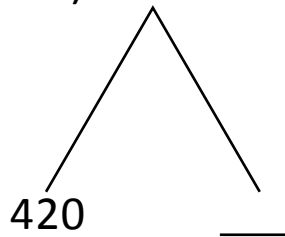
$$250 + \underline{\quad} = 450.$$

4) $330 + 180$



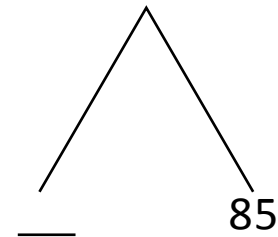
$$310 + \underline{\quad} = 510.$$

2) $440 + 280$



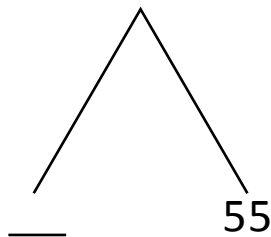
$$420 + 300 = \underline{\quad}.$$

5) $199 + 86$



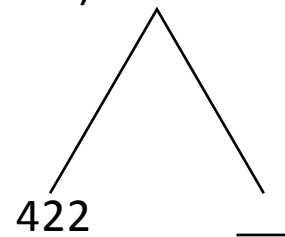
$$200 + \underline{\quad} = \underline{\quad}.$$

3) $298 + 57$



$$300 + \underline{\quad} = \underline{\quad}.$$

6) $425 + 397$



$$422 + \underline{\quad} = \underline{\quad}.$$