

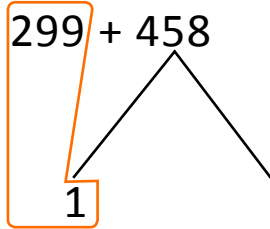


NAME _____ DATE _____

ADDITION OR SUBTRACTION

Choose the best strategy and solve. Explain why you chose that strategy.

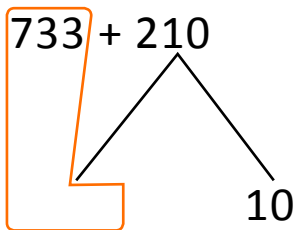
1) $299 + 458 =$ _____



$=$ _____ $+ 457 =$ _____

Explanation:

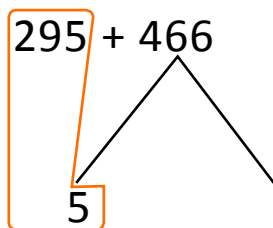
2) $733 + 210 =$ _____



$=$ _____ $+ 10 =$ _____

Explanation:

3) $295 + 466 =$ _____



$=$ _____ $+ 461 =$ _____

Explanation: