



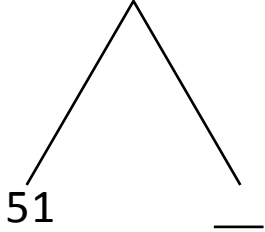
NAME \_\_\_\_\_

DATE \_\_\_\_\_

## ADDITION OR SUBTRACTION

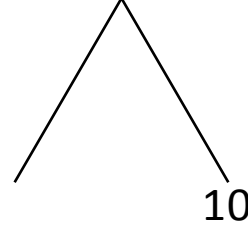
Solve the addition sentence by using number bond.

1) 53 tens + 38 tens = \_\_\_\_ tens.



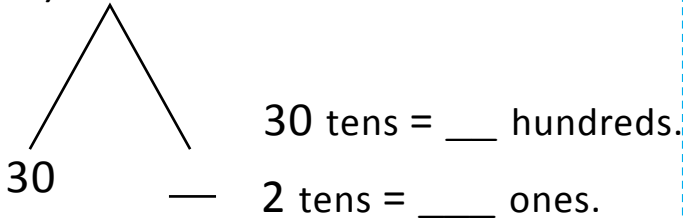
51 tens + \_\_\_\_ tens = \_\_\_\_ tens.

5) 19 tens + 11 tens = \_\_\_\_ tens.



\_\_\_\_ + 10 tens = \_\_\_\_ tens.

2) 32 tens = \_\_\_\_.

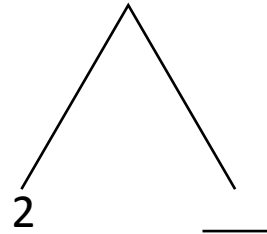


30 tens = \_\_\_\_ hundreds.

2 tens = \_\_\_\_ ones.

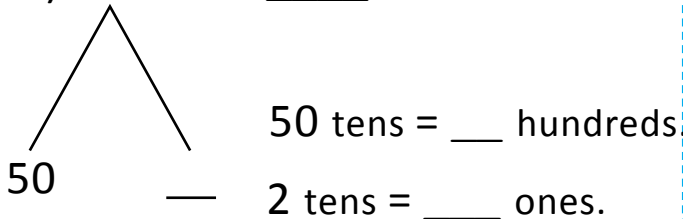
\_\_\_\_ + \_\_\_\_ = 320.

6) 28 tens + 23 tens = \_\_\_\_ tens.



\_\_\_\_ + 21 = \_\_\_\_ tens.

3) 52 tens = \_\_\_\_.

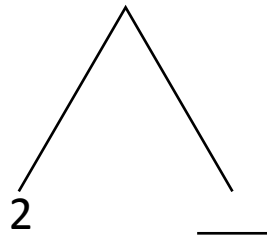


50 tens = \_\_\_\_ hundreds.

2 tens = \_\_\_\_ ones.

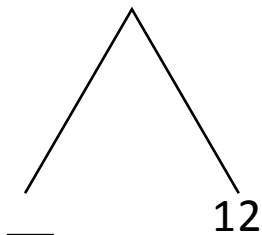
\_\_\_\_ + \_\_\_\_ = \_\_\_\_.

7) 28 tens + 24 tens = \_\_\_\_ tens.



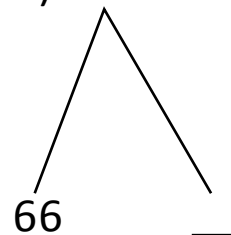
\_\_\_\_ + 22 = \_\_\_\_ tens.

4) 19 tens + 13 tens = \_\_\_\_ tens.



20 tens + 12 tens = \_\_\_\_ tens.

8) 67 tens + 19 tens = \_\_\_\_ tens.



66 + \_\_\_\_ = \_\_\_\_ tens.