



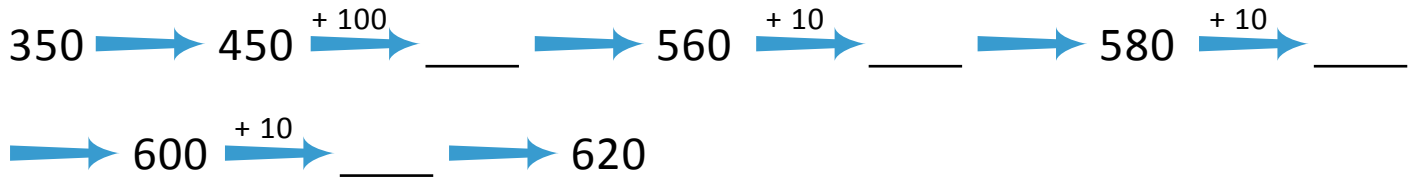
NAME \_\_\_\_\_

DATE \_\_\_\_\_

## ADDITION OR SUBTRACTION

Solve each using the arrow way.

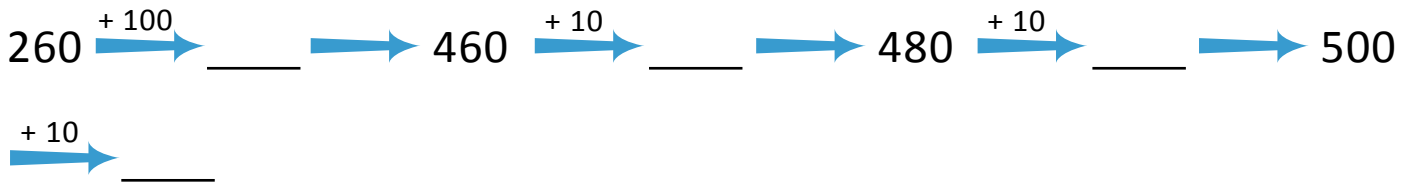
1)  $350 + 270 =$  \_\_\_\_\_.



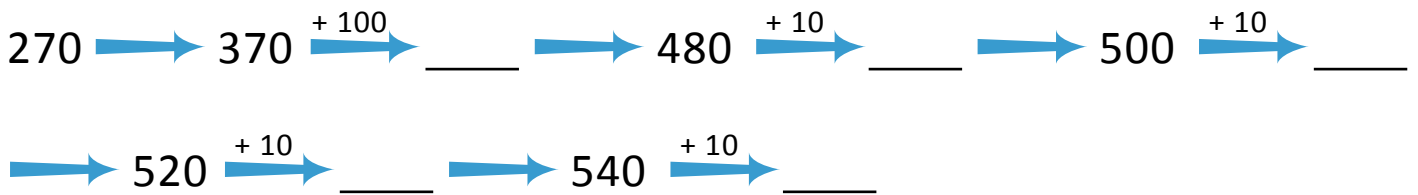
2)  $380 + 230 =$  \_\_\_\_\_.



3)  $260 + 250 =$  \_\_\_\_\_.



4)  $270 + 280 =$  \_\_\_\_\_.



5)  $280 + 250 =$  \_\_\_\_\_.

