



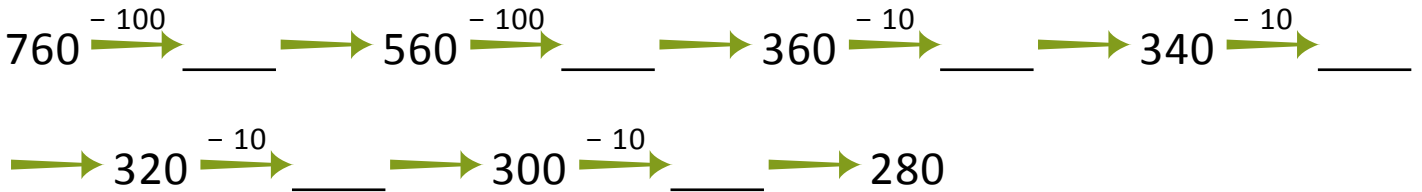
NAME \_\_\_\_\_

DATE \_\_\_\_\_

## ADDITION OR SUBTRACTION

Subtract multiples of 100 and some tens within 1000. Solve each using the arrow way.

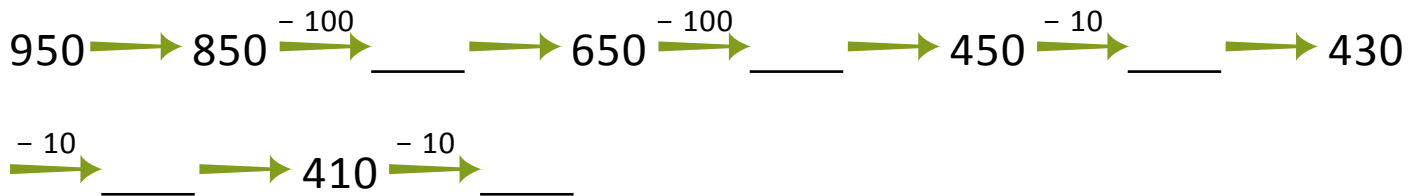
1)  $760 - 480 = \underline{\quad}$ .



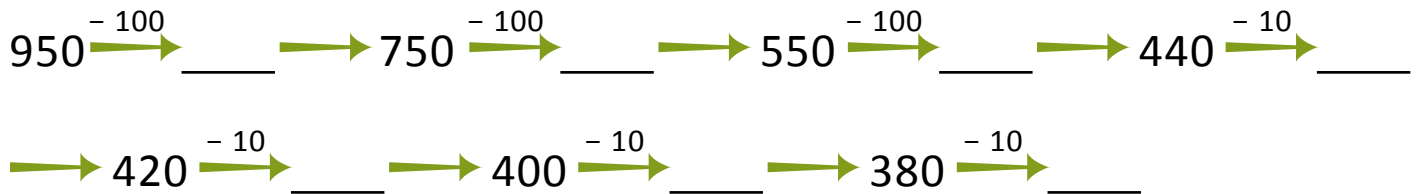
2)  $950 - 500 = \underline{\quad}$ .



3)  $950 - 550 = \underline{\quad}$ .



4)  $950 - 580 = \underline{\quad}$ .



5)  $820 - 320 = \underline{\quad}$ .

