



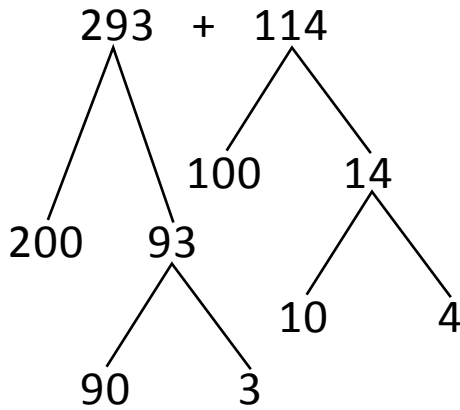
NAME \_\_\_\_\_

DATE \_\_\_\_\_

## ADDITION OR SUBTRACTION

Solve the following problems using the vertical method your place value chart and number disks. Bundle a ten or hundred when necessary.

4th model:



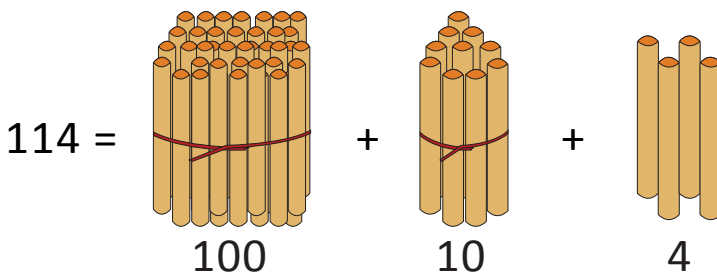
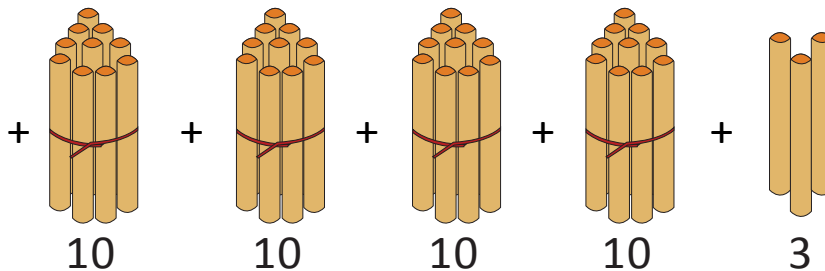
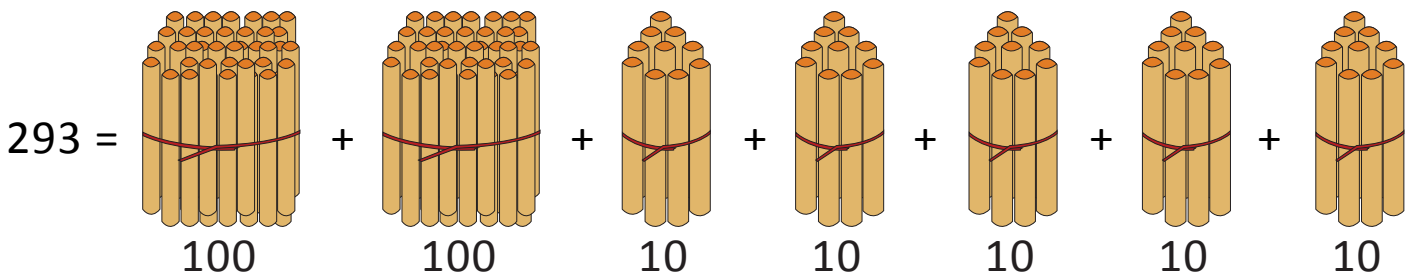
(OR)

$$= 200 + 100 + 90 + 10 + 3 + 4$$

$$= 300 + \underline{\quad} + \underline{\quad}$$

$$= \underline{\quad} + \underline{\quad} = \underline{\quad}$$

5th model:



10 ones = 1 hundred

$$293 + 114 = \underline{\quad} \text{ hundreds} + \underline{\quad} \text{ tens} + \underline{\quad} \text{ ones.}$$

$$= \underline{\quad} \text{ hundreds} + \underline{\quad} \text{ ones} = \underline{\quad}.$$