



NAME _____

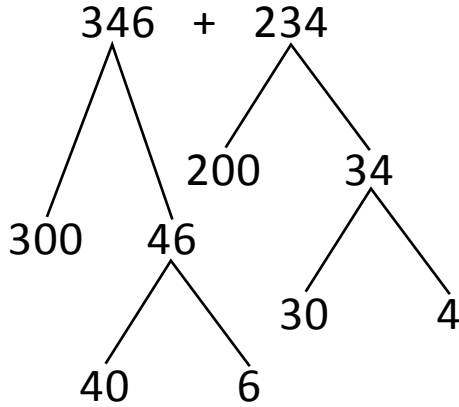
DATE _____

ADDITION OR SUBTRACTION

Solve the following problems using the vertical method your place value chart and number disks. Bundle a ten or hundred when necessary.

(OR)

4th model:



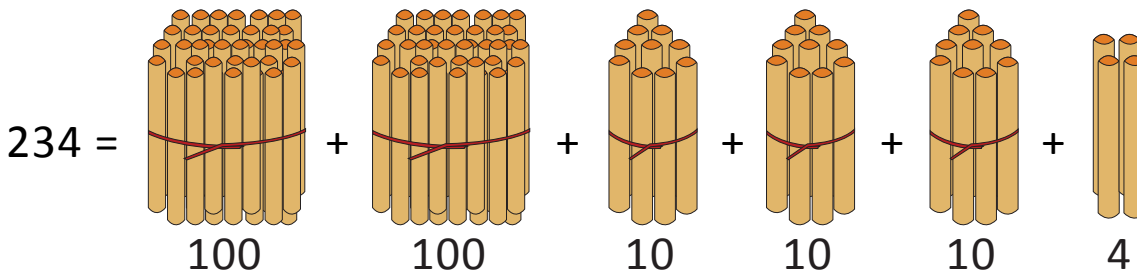
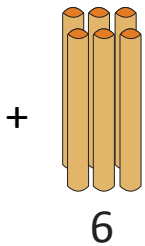
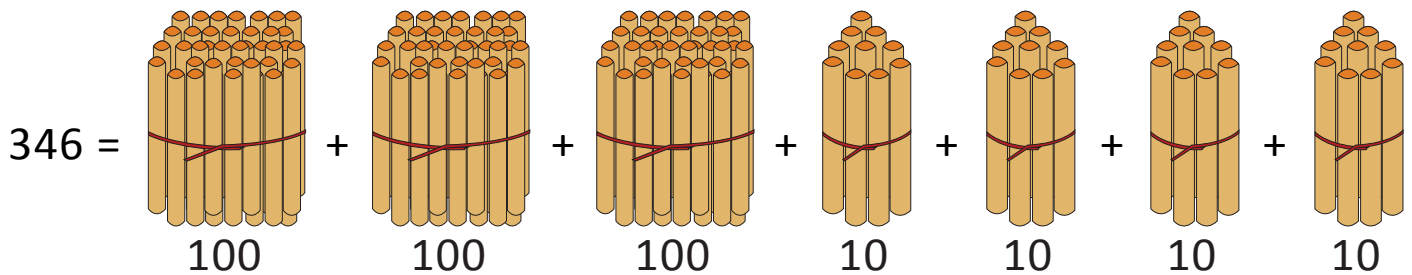
$$= 300 + 200 + 40 + 30 + 6 + 4$$

$$= \underline{\quad} + 70 + \underline{\quad}$$

$$= 500 + \underline{\quad} = \underline{\quad}$$

(OR)

5th model:



$$346 + 234 = \underline{\quad} \text{ hundreds} + \underline{\quad} \text{ tens} + \underline{\quad} \text{ ones.}$$

$$= \underline{\quad} \text{ hundreds} + 8 \text{ tens} = 500 + \underline{\quad} = \underline{\quad}.$$