



NAME _____

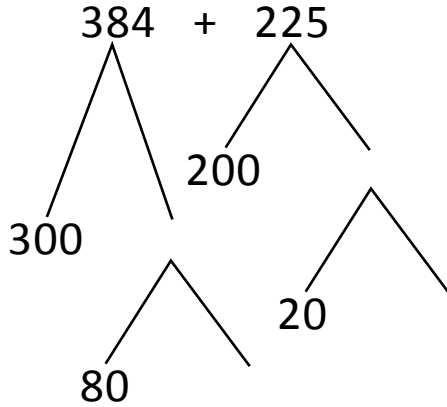
DATE _____

ADDITION OR SUBTRACTION

Solve the following problems using the vertical method your place value chart and number disks. Bundle a ten or hundred when necessary.

(OR)

4th model:



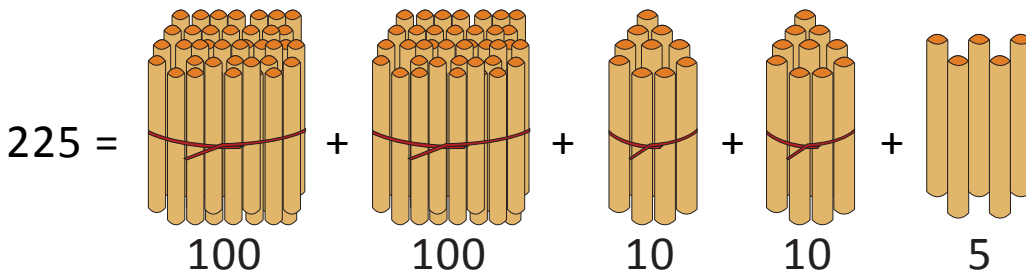
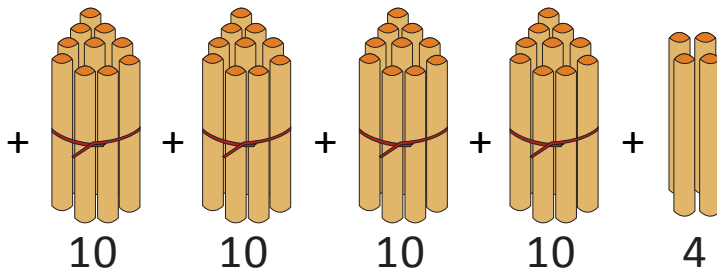
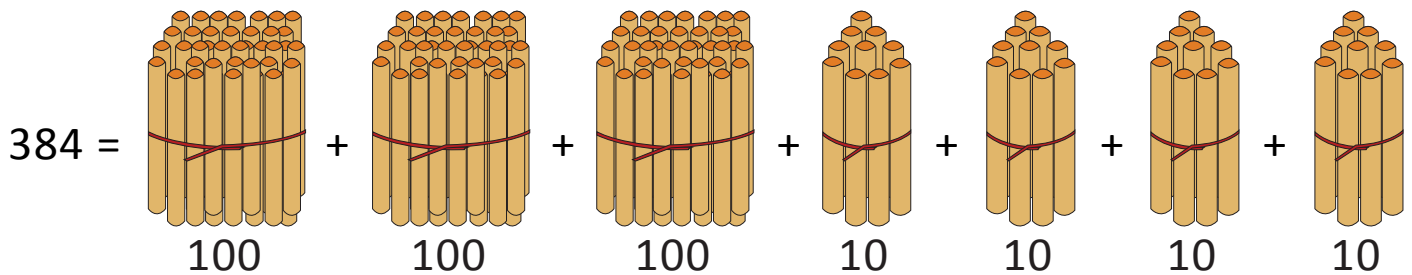
$$= 300 + 200 + 80 + 20 + 4 + 5$$

$$= 500 + \underline{\quad} + 9$$

$$= \underline{\quad} + 9 = \underline{\quad}$$

(OR)

5th model:



$$384 + 225 = \underline{\quad} \text{ hundreds} + \underline{\quad} \text{ tens} + \underline{\quad} \text{ ones.}$$

$$10 \text{ tens} = \underline{\quad} \text{ hundred.}$$

$$= \underline{\quad} + 9 = \underline{\quad}.$$