

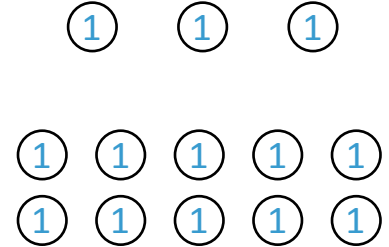
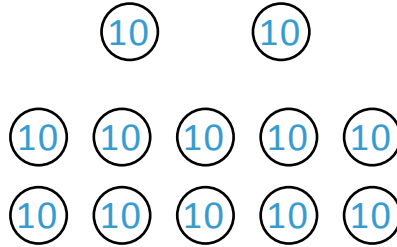



NAME _____ DATE _____

ADDITION OR SUBTRACTION

Solve by drawing chips on the place value chart then use addition to check your work.

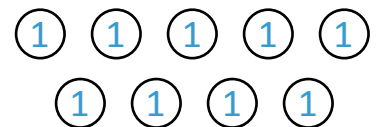


1) $723 - 584 =$ _____



Using addition to check the work.

Numbers	H	T	O
139			
584			
$139 + 584$			

2) $699 - 210 =$ _____



Using addition to check the work.

Numbers	H	T	O
489			
210			
$489 + 210$			