



NAME _____

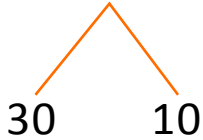
DATE _____

MAKE A TEN TO ADD WITHIN 20

Fill in the blanks to make the number sentences true. Draw number bonds to help you subtract from the ten.

Examples:

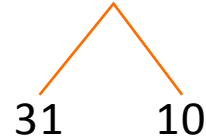
i) $40 - 8 = \underline{\quad}$



$10 - 8 = \underline{2}$

$\underline{2} + 30 = 32$

ii) $41 - 8 = \underline{\quad}$



$10 - 8 = 2$

$31 + 2 = 33$

a) $20 - 8 = \underline{\quad}$



$10 - 8 = 2$

$2 + 10 = \underline{\quad}$

d) $20 - 9 = \underline{\quad}$



$10 - \underline{\quad} = \underline{\quad}$

$10 + \underline{\quad} = \underline{\quad}$

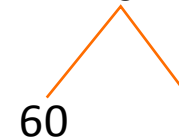
b) $30 - 8 = \underline{\quad}$



$10 - 8 = 2$

$\underline{\quad} + \underline{\quad} = \underline{\quad}$

e) $70 - 9 = \underline{\quad}$



$10 - \underline{\quad} = \underline{\quad}$

$\underline{\quad} + 60 = \underline{\quad}$

c) $90 - 8 = \underline{\quad}$



$10 - 8 = \underline{\quad}$

$80 + \underline{\quad} = \underline{\quad}$

f) $40 - 5 = \underline{\quad}$



$\underline{\quad} - 5 = \underline{\quad}$

$\underline{\quad} + 30 = \underline{\quad}$